



श्री Venkateshwar International School

Sector – 18, Dwarka, New Delhi-78

**Holiday Homework (2017-18)
(Class - III)**

Longer days and shorter nights

Dark shades & brighter lights

Favourite music & best friends

Keep away pencils keep away pens.

Make these days the time of your life

And make the nights just as right

This time only comes once a year

So live it up without inhibition and fear.

This summer break try and make a difference



- **Appreciate Nature** - Go for long walks in a park or garden with your family and friends. Adopt / Grow a plant.
- **Unravel the artist in you** - Create a new story, try a new recipe with your mom, learn a new song, play a new instrument.
- **Good manners is the key** - Respect your parents, grandparents and all elders. Use three magical words (Sorry, Please and Thank you) often. 'A little more courtesy goes a long way.'
- **Stay Fit, Stay Healthy** - Play your favourite game / sport regularly. Develop in yourself the spirit of sportsmanship & sense of healthy competition.
- **Tête à Tête** – Go for a long walks/drives with your family and friends learn from their experiences. They are a living story book.
- **Learn about our Heritage** – Find some time to visit museum and monuments. Read about them. Learn new things related to your country.
- **Save Nature** – Contribute to save our precious environment. Minimize the wastage of resources like water, fuel and electricity.

Must do:-

- **Eat healthy food and drink lots of water & juices.**
- **Read everyday. Watch less of T.V.**
- **Revise the concepts taught.**

The Ultimate Reading List

A man is known by the book re reads...



- Make a list of books you would like to read this summer break.
- No matter how busy you are, find time for reading.
- Travel with your book.
- Seek help from parents.
- Learn new things and virtues from it.

Books I Read in May
Books I Read in June

Kindly Note:

- Holiday Homework submission date for **Class - III is June 27, 2017.**

Enjoy the summer vacation with your ward.

ENGLISH

(a) "Every family has a story to tell...."

So in your own words, narrate the most memorable moment spent with your family on an **A-4** size sheet.

(b) Read as many books as you can during the vacation and make a story map for one of your favourite book. Kindly refer to the given story map.

(c) Everyone has a role model for people they look up to in their life. For me that person is my _____. Write a paragraph and paste the picture of that person on an **A-4** size pastel sheet.

**Story
Map**

Title:

Characters:

Author:
Illustrator:

Setting:

Problem:

Solution:

X

```
graph TD; Title[Title] -.-> Author[Author]; Author -.-> Illustrator[Illustrator]; Characters[Characters] -.-> Author; Characters -.-> Setting[Setting]; Setting -.-> Problem[Problem]; Problem -.-> Solution[Solution]; Solution -.-> Problem; Solution -.-> Title;
```

SCIENCE

(a) Create your own family recipe

The kitchen is a symbolic heart of a home, the place where everyone comes together to smell simmering sauces. Listen to natural chit-chat and of course taste the delicious meal.

In your summer vacation prepare any dish with the help of your parents. Paste its picture and write down the recipe as well as the ingredients on an **A-4** size sheet.

(b) Plant a family Garden

Let's get some hands-on experience. Tuck tender seedlings into the pot and watch them grow and blossom like you blossom every day. Also give an interesting name to your plant.

SOCIAL SCIENCE

(a) Family is like branches on a tree. We all grow in different directions, yet our roots remain as one."

Make a family photo album using a scrapbook. Paste photo of each family member along with their name. Take their interview and write their age, hobbies, likings, favourite dance, movie, song etc.

(b) "Connecting home and school makes us great community of learners."

There is a saying that school is the second home and teachers are the second mothers. School is an extended family of a child. Write a message expressing your feelings towards the school on an A4 size sheet.

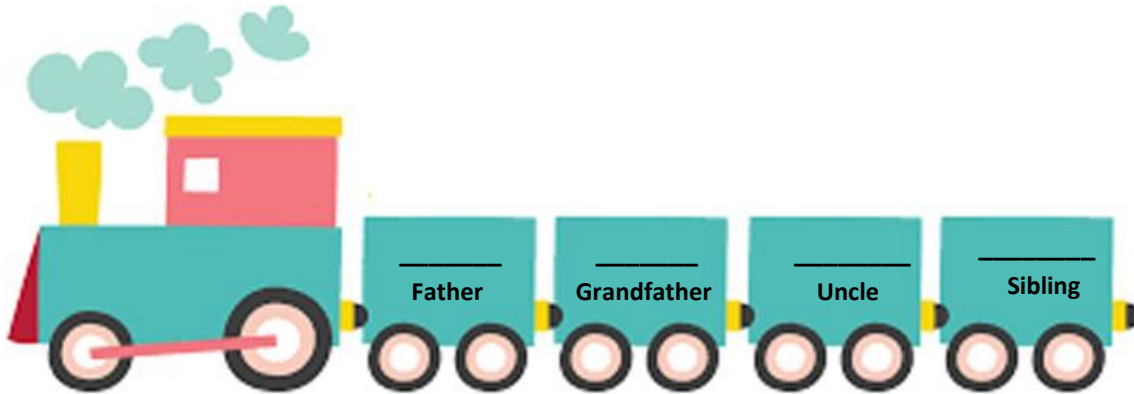
MATHEMATICS

Roll number 1 – 18

As you know the age of all family members, make a train using matchboxes as compartments. Colour the match boxes with the bright colours and paste the number on it. Also answer the questions given below.

Roll number 19 – 38

Visit 3 families in your neighbourhood and note down the age of your friends' parents. Make a train using matchboxes as compartments. Colour the match boxes with bright colours and paste the numbers on it. Also answer the questions given below.



My Family train

1. Arrange the given numbers in ascending order.

2. Arrange the given numbers in descending order.

3. The greatest number

4. Write the expanded form of any one number.

5. Find the sum of any two family member's age

6. Find the difference between the ages of any two family members

7. Find the even number

8. Find the odd number

Learn and write tables from 2 to 10 in the math notebook.

- Practice mathematical operations : addition, subtraction everyday.
Also practice multiplication and division as done in class II.
- Complete the given worksheets and paste them in the respective notebooks.



श्री Venkateshwar International School

Sector – 18, Dwarka, New Delhi-78

Class III

English (Common, Proper and Collective Nouns)

Name- _____

Section- _____

Q1. Match the common nouns in column A with the proper noun in column B.

Column A

- (a) city
- (b) car
- (c) country
- (d) river
- (e) book
- (f) monument
- (g) leader

Column B

- (i) Ganga
- (ii) Mumbai
- (iii) Red Fort
- (iv) Mahabharata
- (v) Bhagat Singh
- (vi) China
- (vii) Maruti

Q2. Identify the common and proper noun in the given sentences and write them in the provided space:

	Common Noun	Proper Noun
(a) Himalayas are the youngest mountains.	_____	_____
(b) January is the first month of the year.	_____	_____
(c) Sachin Tendulkar is the best cricket player.	_____	_____
(d) Ramayana is the holy book of Hindus.	_____	_____
(e) Tom and Jerry are the popular cartoon characters.	_____	_____
(f) Shubham is an intelligent boy.	_____	_____
(g) Pacific is the largest ocean.	_____	_____
(h) The Times of India is the best selling newspaper.	_____	_____
(i) Maruti is the most popular brand of cars.	_____	_____

(j) Akbar was the famous king of Mughal dynasty. _____

(k) Christmas is the festival of Christians. _____

(l) Riya and Sia are two intelligent girls in this class. _____

Q3. Fill in the blanks using the suitable collective noun:

(a) A _____ of geese could be heard a mile away.

(b) I saw a _____ of wolves in the zoo.

(c) A _____ of children were running around the classroom.

(d) On a clear night, we can see a _____ of stars.

(e) I saw a _____ of lions in the National Park.

(f) My friend was attacked by a _____ of bees.

(g) I saw a _____ of kittens.

(h) My father bought a _____ of grapes.

(i) I gave a _____ of flowers to my mother.

Q4. Write collective nouns for the following:

(a) A _____ of aircrafts

(b) A _____ of crows

(c) A _____ of sticks

(d) A _____ of players

(e) A _____ of puppies

(f) A _____ of fish

(g) An _____ of caterpillars

(h) A _____ of birds

(i) A _____ of hens

(j) A _____ of chicks

(k) A _____ of books

(l) A _____ of musicians



श्री Venkateshwar International School

Sector-18, Dwarka, New Delhi-75

Class – III (Mathematics)

Name: _____

Sec. _____

Q1. Write the place and place value of the underlined digit.

Th	H	T	O	Place	Place Value
<u>4</u>	7	8	0		
7	<u>6</u>	0	9		
2	1	<u>7</u>	4		
7	0	8	<u>6</u>		

Q2. Fill in the blanks:

- a) 3478, _____, _____, 3481, _____.
- b) $6000+700+50+9=$ _____.
- c) The value of 8 in 2783 is _____.
- d) _____ is 100 more than 5280.
- e) In 4782, the digit 7 is in _____ place.
- f) Three thousand nine hundred two is _____.
- g) _____ is the greatest 4 digit number.
- h) $5809+990=$ _____.

Q3. Arrange the following in ascending order:

- a) 4500 , 4504 , 4050 , 4005
Ans. _____ , _____ , _____ , _____
- b) 8678 , 8456 , 8873 , 8320
Ans. _____ , _____ , _____ , _____

Q4. Arrange the following in descending order:

a) 1145 , 1045 , 1154 , 1405

Ans. _____ , _____ , _____ , _____

b) 7256 , 7265 , 7148 , 7293

Ans. _____ , _____ , _____ , _____

Q5. Write in words:

a) 4050-_____

b) 2789-_____

c) 7093-_____

Q6. Write in expanded form:

a) 3006-_____

b) 9745-_____

c) 8231-_____

Q7. Write > or < :

a) 6789 6798

b) 5090 5009

c) 8832 8232

Q8. Complete the number pattern:

a) 4789 , _____ , _____ , 7789 , _____

b) 2139 , _____ , 2339 , _____ , _____

c) 9574 , _____ , 9554 , _____ , 9534 , _____

d) 6789 , _____ , 6809 , _____ , _____

Q9. Form the smallest 4 digit number using the digits 6 , 0 , 7 and , 9.

Ans. _____

Q10. Form the greatest 4 digit number using the digits 4 , 0 , 1 and, 8.

Ans. _____



श्री वेंकटेश्वर इन्टरनेशनल स्कूल

सेक्टर-18, द्वारका, नई दिल्ली-110078

कक्षा -3

विषय: हिंदी

नाम:-----

विभाग:-----

प्रश्न 1. दिए गए गद्यांश में से पाँच संज्ञा शब्दों पर पेंसिल से गोला लगाइए।

एक चींटी थी। वह जंगल में तालाब के किनारे रहती थी। एक दिन वह तालाब किनारे पानी पीने गई। पानी पीते-पीते अचानक तालाब में गिर गई। कबूतर ने उसे गिरते देखा और एक पत्ता तोड़कर पानी में गिरा दिया चींटी उस पत्ते पर चढ़कर बाहर आ गई। चींटी ने कबूतर को धन्यवाद दिया।

प्रश्न 2. दिए गए शब्दों का वाक्य प्रयोग कीजिए।

(क) तलवार

(ख) परीक्षा

(ग) भलाई

प्रश्न 3. सही कथन के सामने सही $\sqrt{\quad}$ और गलत \times के सामने गलत का चिह्न लगाओ।

(क) भाषा का बोला गया रूप मौखिक भाषा होता है।

(ख) हम अपने विचार केवल बोलकर ही प्रकट कर सकते हैं।

(ग) भाषा का प्रयोग दो तरह से होता है।

(घ) संकेत द्वारा समझाई गई भाषा सांकेतिक भाषा है।

प्रश्न 4. संयुक्त व्यंजनों का प्रयोग कर दो-दो शब्द बनाइए।

(क) **व्य** _____

(ख) **प्य** _____

(ग) **च्य** _____

(घ) **स्थ** _____

(ङ) **स्त** _____

प्रश्न 5. वचन बदलिए—

(क) लड़का -----

(ख) बगुला -----

(ग) ताला -----

(घ) चूहा -----

प्रश्न 6. लिंग बदलिए—

(क) पड़ोसिन -----

(ख) नानी -----

(ग) बहिन -----

(घ) पुत्री -----

प्रश्न 7. आप अपने परिवार के साथ घूमने जा रहे हैं। घूमने जाने के लिए आपको क्या-क्या तैयारियाँ करनी चाहिए
ए-4 साइज़ शीट पर चित्र सहित लिखिए।

अथवा

आप अपने परिवार के कार्यों में किस प्रकार मदद करते हैं। ए-4 साइज़ शीट पर चित्र सहित लिखिए।

प्रश्न 8 चित्र देखकर 8-10 पंक्तियाँ लिखिए।